




**Colorie** la case qui correspond au nombre d'éléments.




4	8	6
---	---	---



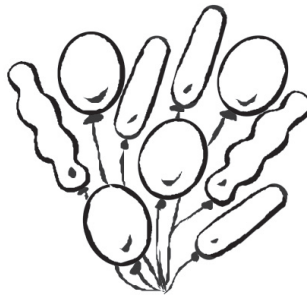
6	8	9
---	---	---



7	5	9
---	---	---




3	5	2
---	---	---



8	3	9
---	---	---




2	5	3
---	---	---



7	4	1
---	---	---



5	7	9
---	---	---



6	9	10
---	---	----

*Objectif* • Dénombrer des collections de 2 à 10 éléments.

*Conseil* • Faire décrire chaque dessin et demander combien d'éléments le constitue.